

objectif(s) : dénombrer une collection ; l'exprimer en chiffre

consigne(s) : compte les enveloppes qui sont tombées de chaque sacoches ; écris le chiffre correspondant



domaine :



lecture



écriture



maths



perception



avec aide



sans aide



ou colle

prénom : _____



ou


date : _____




A brown satchel is on the left. Ten envelopes are scattered around it. A red square box is at the bottom right for the answer.



A brown satchel is at the bottom. Ten envelopes are scattered around it. A red square box is at the bottom right for the answer.




A brown satchel is on the left. Seven envelopes are scattered around it. A red square box is at the bottom left for the answer.



A brown satchel is on the right. Eight envelopes are scattered around it. A red square box is at the bottom left for the answer.



A brown satchel is at the bottom left. Seven envelopes are scattered around it. A red square box is at the bottom right for the answer.



A brown satchel is on the left. Five envelopes are scattered around it. A red square box is at the bottom right for the answer.

